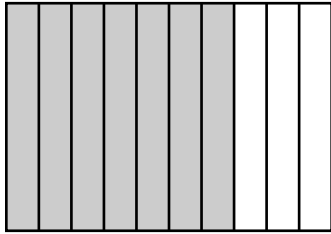


Name: \_\_\_\_\_

# Fractions, Decimals, and Percents




Tell what part of the picture is shaded.

\_\_\_\_\_ fraction

\_\_\_\_\_ decimal

\_\_\_\_\_ percent




Tell what part of the picture is shaded.



## ~ PREVIEW ~

Please log in or register to download the printable version of this worksheet.

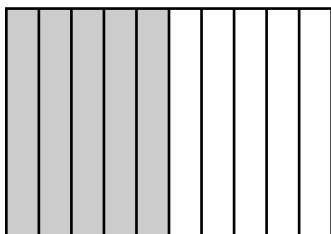


Tell what part of the picture is shaded.

\_\_\_\_\_ fraction

\_\_\_\_\_ decimal

\_\_\_\_\_ percent



Tell what part of the picture is shaded.

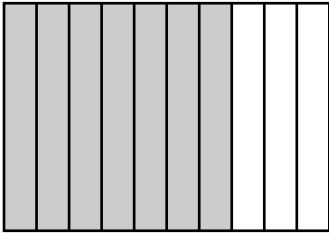
\_\_\_\_\_ fraction

\_\_\_\_\_ decimal

\_\_\_\_\_ percent

# ANSWER KEY

## Fractions, Decimals, and Percents



Tell what part of the picture is shaded.

$$\frac{7}{10}$$


fraction

$$.7$$

decimal

$$70\%$$

percent




Tell what part of the picture is shaded.

$$37$$



# ~ PREVIEW ~

Please log in or register to download the printable version of this worksheet.



Tell what part of the picture is shaded.

$$\frac{91}{100}$$

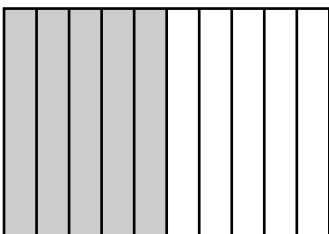
fraction

$$.91$$

decimal

$$91\%$$

percent



Tell what part of the picture is shaded.

$$\frac{5}{10}$$

fraction

$$.5$$

decimal

$$50\%$$

percent