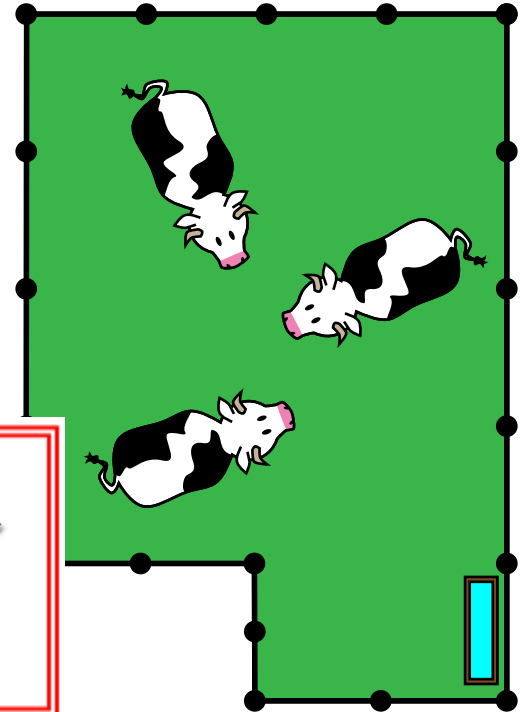
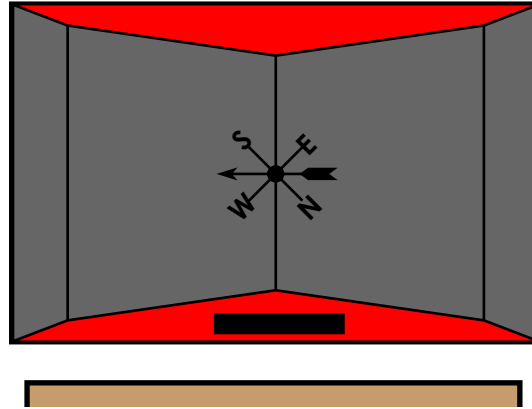



Name: \_\_\_\_\_

# Farm Perimeter

Use a ruler to answer the questions below.



**PREVIEW**

Please log in or register to download the printable version of this worksheet.

1. Measure the lengths of the sides of the corn field in centimeters. Label the lengths on the picture above.

What is the perimeter of the corn field? \_\_\_\_\_

2. Measure the lengths of the sides of the pigs' pen in centimeters. Label the lengths on the picture above.

What is the perimeter of the pigs' pen? \_\_\_\_\_

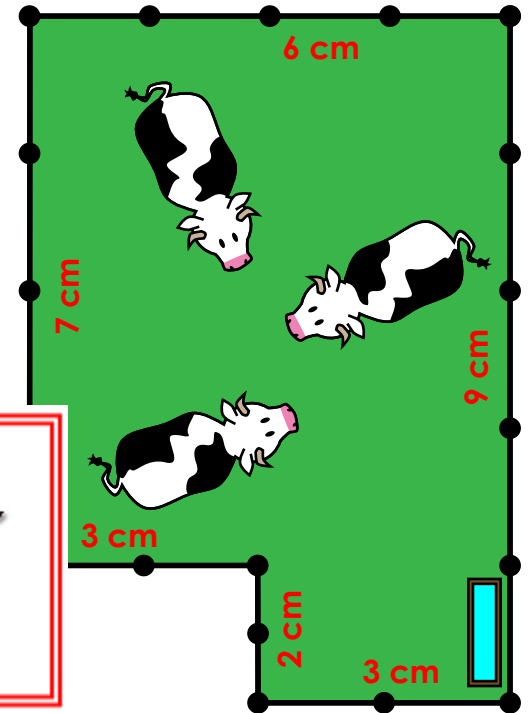
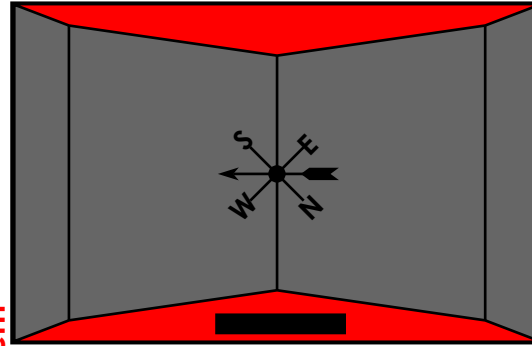

3. Measure the lengths of the sides of the cows' field in centimeters. Label the lengths on the picture above.

What is the perimeter of the cows' field? \_\_\_\_\_

# ANSWER KEY

## Farm Perimeter

Use a ruler to answer the questions below. **\*NOTE: Answers will vary based on print size. Please verify the actual lengths.**



**PREVIEW**

Please log in or register to download the printable version of this worksheet.

1. Measure the lengths of the sides of the corn field in centimeters. Label the lengths on the picture above.

What is the perimeter of the corn field? \* 38 cm       $8 + 11 + 8 + 11 = 38$

2. Measure the lengths of the sides of the pigs' pen in centimeters. Label the lengths on the picture above.

What is the perimeter of the pigs' pen? \* 20 cm       $3.5 + 6.5 + 3.5 + 6.5 = 20$

3. Measure the lengths of the sides of the cows' field in centimeters. Label the lengths on the picture above.

What is the perimeter of the cows' field? \* 30 cm       $6 + 7 + 3 + 2 + 3 + 9 = 20$