

Name: _____


Basic Shapes

Cut out the shapes at the bottom of the page and glue them into the box with the correct shape name. Write how many sides there are in each shape.



rectangle

_____ sides



triangle

_____ sides



square

_____ sides

PREVIEW

Please log in or register to download the printable version of this worksheet.

hexagon

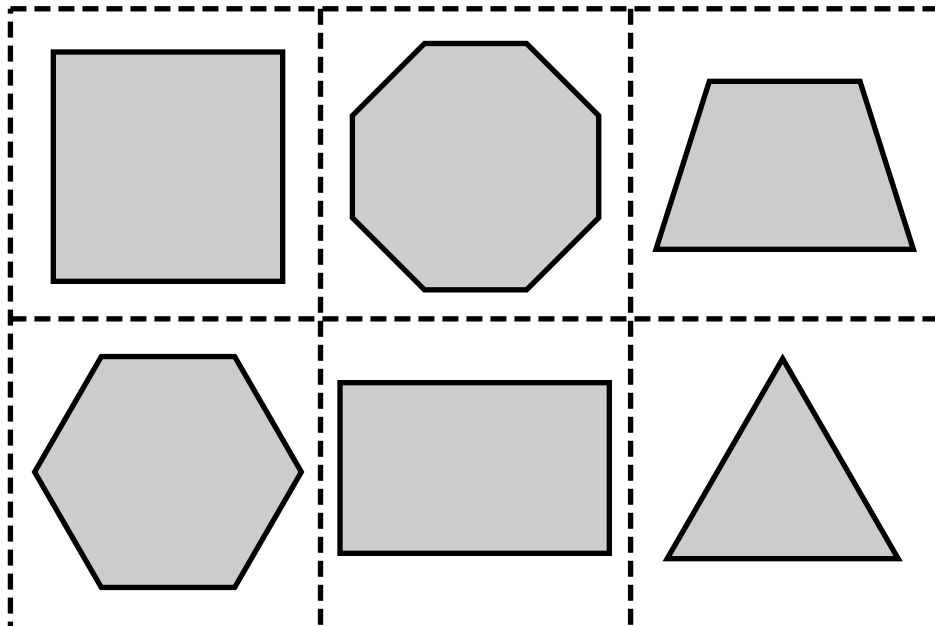
_____ sides

trapezoid

_____ sides

octagon


_____ sides



ANSWER KEY


Basic Shapes

Cut out the shapes at the bottom of the page and glue them into the box with the correct shape name. Write how many sides there are in each shape.




rectangle

4 sides




triangle

3 sides



square

4 sides




hexagon

6 sides



trapezoid

4 sides



octagon

8 sides

 **PREVIEW** ~
Please log in or register to download the printable version of this worksheet.